


Geometry Worksheet



A 1 Line segment

2 Line

3 Intersecting lines

4 Circumference

5 Radius

B 6. b) Diameter

7. a) Twice

8. b) Parallel

9. c) No

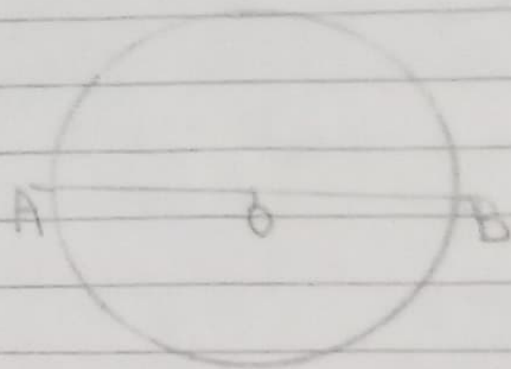
10 a) R

C 11

$$\text{Radius} = \frac{\text{Diameter}}{2}$$

$$\text{Radius} = \frac{44}{2} = 22 \text{ cm}$$

12




Radius = AO, OB

Diameter = AOB

I use CD, DVD, Plate, Wheel in my day to day life

13

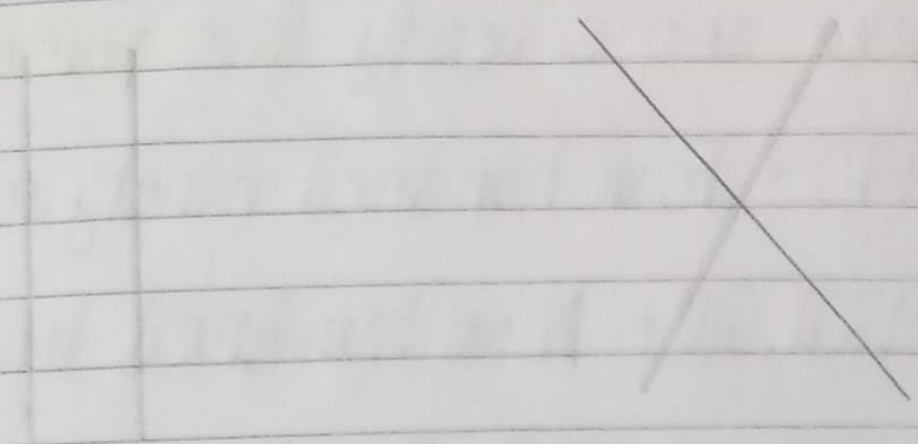


14

$$\text{Diameter} = 2 \times \text{Radius} = \phi$$

$$\text{Diameter} = 13 \times 2 = 26 \text{ cm}$$

15



Parallel line

Intersecting line