

GEOMETRY

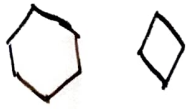
WORKSHEET

I. Fill in the blanks :



- a) The 2-D shape has two sides.
- b) A shape that has 3 sides is triangle
- c) There are 6 faces of a cube.
- d) The cylinder 3-D shape has no vertex but has flat faces.

II. Do as directed

A) Draw a curved line and a straight line. 

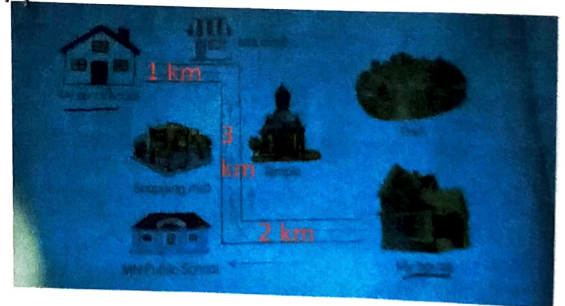
B) Draw a hexagon and a rhombus. 

C) Fill up.

| | | |
|----------------|---|--|
| SHAPES |  |  |
| NAME | cuboid | cone |
| FLAT FACES | 6 | 1 |
| VERTICES | 8 | 1 |
| STRAIGHT EDGES | 12 | 1 |

D) Find out.

- 1) What is the distance from your house to your aunt's house? 6Km
- 2) What is the distance from your aunt's house to the milk booth? 5Km
- 3) What is there opposite to the shopping mall? Temple
- 4) Everyday how many kilometers do you need to walk to go to school and return back from the school? 4Km



----- END -----