

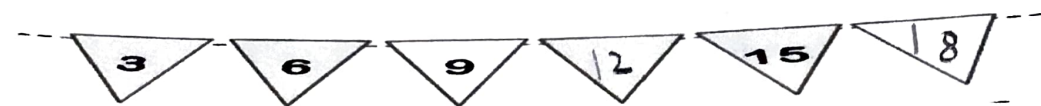

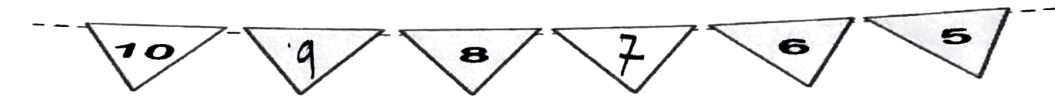







Chapter- 11

PATTERNS

WORKSHEET

I. Complete the following :

1. 
2. 
3. 
4. 
5. 
6. 
7. 
8. 
9. 
10. 

II. Do as directed :

Find the pattern rule.

1. 6, 8, 10, 12, 14, 16, 18, 20, 22, 24, 26, 28, 30, 32, 34
2. 56, 49, 42, 35, 28, 21, 14, 7, 0, 7, 14, 21, 28, 35, 42, 49, 56
3. 45, 40, 35, 30, 25, 20, 15, 10, 5, 10, 15, 20, 25, 30, 35, 40, 45
4. 12, 15, 18, 21, 24, 27, 30, 33, 36, 39, 42, 45, 48, 51, 54
5. 11, 22, 33, 44, 55, 66, 77, 88, 99, 110

--- END ---