

Worksheet  
Sub - Maths  
Ch - 7

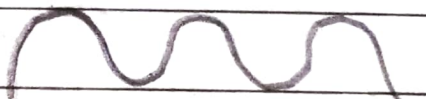

Date \_\_\_\_\_  
Page \_\_\_\_\_

{ Madhavan Pathak  
{ Class - III Sec - C Seno. 7640


① Fill in the blanks -

a) length and width      c) Six

b) triangle      d) cylinder

② A)         
curved line      straight  
line

B)



Hexagon



Rhombus

(C) Fill up

SHAPES		
FLAT FACES	6	1
VERTICES	8	1
STRAIGHT EDGES	12	0

(D) Find out

- 1) 6 km Distance.
2. 1 km Distance
3. Temple
4. 4 km.

