

1. Choose the correct answer.

a. A triangle has 3 vertices.

b. The Square has 4 equal sides.

c. A Hexagon has 6 sides.

2. Write True or false.

i. A rectangle has 2 equal diagonals. [T]

ii. A sphere has 2 flat faces. [F]

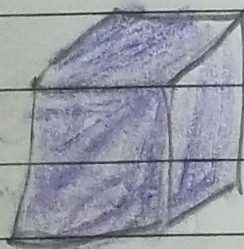
iii. We draw straight lines by using a ruler.

[T]

3. i. Name the shapes



→ Triangle

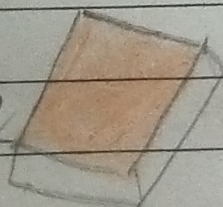


Cube

ii.




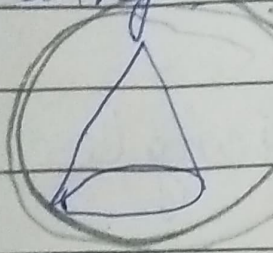
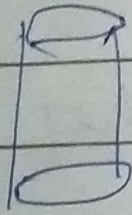
→ cube



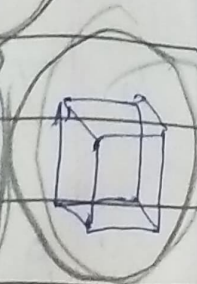
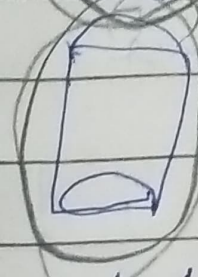

cuboid

iii Circle the object having :-

1. Vertex \rightarrow



Only flat faces \rightarrow

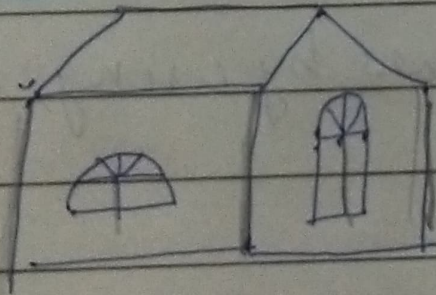


iv. Write straight-line or curved line :-

C \rightarrow 2

Z \rightarrow 4


4.



slanting lines \rightarrow 7

Horizontal lines \rightarrow 7

vertical lines \rightarrow 5



Triangles \rightarrow 9

Rectangle \rightarrow 11

Circle \rightarrow 6