

Name: Saanvi Parija
Std: III Sec - A

Subject: Science

Ch ✓ Measurement (worksheet)

A Tick (✓) the correct answer.

1 A small bottle of cough syrup measured in (milliliter / liter).
✓

2 A thermometer / centimetre is used to measure temperature.
✓

3 We use (standard / non-standard) units for measurement.
✓

4 (Celsius / census) is a unit for temperature.
✓

5 Standard unit of time is (second / kilometre).
✓

B Give two examples for each of the following.

1 Non-standard unit for measurement -
Cubit, foot span

2 Instruments for measuring weight - Digital
Balance, common balance

3 Units for measuring capacity - ML, L

4 Units for measuring time - Hours, seconds

5 Scales of measuring temperature -
Centigrade scale, Fahrenheit scale

C. Rewrite the sentences After correcting the underline word.

1. ans The tailor uses an measuring tape to take a measurement.

2. ans 10 kilograms of sugar is larger than 2 kilograms of sugar.

3. ans The distance of school from our house is kilometres.

4. ans Today EVS teacher scolded shradha as she joined the class 15 minutes late.

5. ans Pritam put the chocolate bar in the fridge last night. Now it would have been very cold.

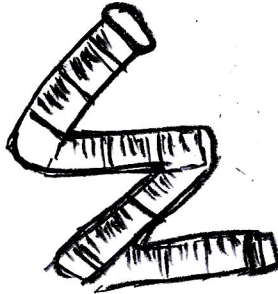
D. Match column A with column B.

1




You generally see me in sweets Sweet Stall

2




I wake you up in the morning

3



I check your temperature when you have fever

4



I found around the neck of a tailor uncle

5



People use me to measure oil