

Chapter- 5

Place Value and Face Value

WORKSHEET

Q1. Choose the correct answer and fill in the blank.

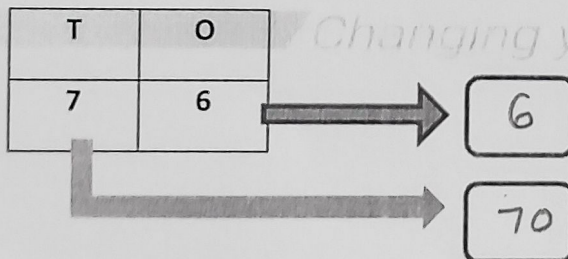
- Place value and face value will be the same in ones place. (ones, tens, hundreds)
- 71 has more tens. (48, 50, 71)
- The place value of 3 in 37 is 30. (3, 30, 70)
- 9 comes just before the smallest 2-digit number. (9, 99, 10)
- The number system contains 11 digits. (10, 11, 9)

Q2. Write True or False for the following statements.

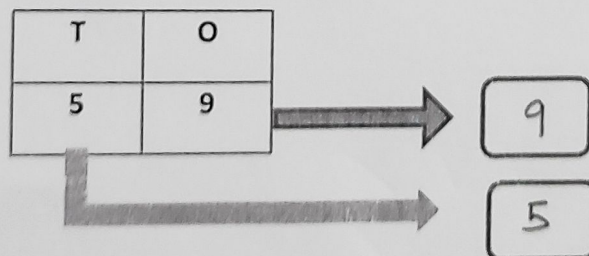
- The face value of 7 in 75 is 7. T
- The place value of 5 in 65 is 5 tens. F
- Each spike in an abacus can have maximum 9 beads only. F
- Expanded form of 95 is equal to 9+5. F
- Compact form of $30 + 6 = 36$. T

Q3. Do as directed.

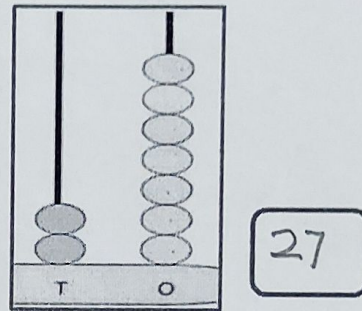
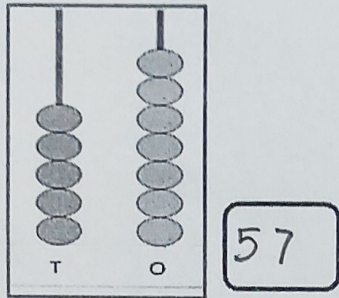
- a. Write the place value of the digits in the given number.



- b. Write the face value of the digits in the given number.



c. Write the numbers shown on the abacus.



d. Write the numbers in expanded form.

i. $97 = \underline{90} + \underline{7}$

ii. $72 = \underline{70} + \underline{2}$

iii. $56 = \underline{50} + \underline{6}$

iv. $23 = \underline{20} + \underline{3}$

e. Write in compact form.

i. $60 + 4 = \underline{64}$

ii. $5 \text{ tens} + 8 \text{ ones} = \underline{58}$

iii. $0 \text{ ones and } 4 \text{ tens} = \underline{40}$

iv. $30 + 9 = \underline{39}$