

CH-10

Division
WORKSHEET

Q1 Circle the correct option.

a. Division is repeated \rightarrow Subtraction /
addition.

b. 12 toffees shared among 4 friend.
Each one gets - three / four toffees.

c. The answer to division is \rightarrow remainder / quotient.

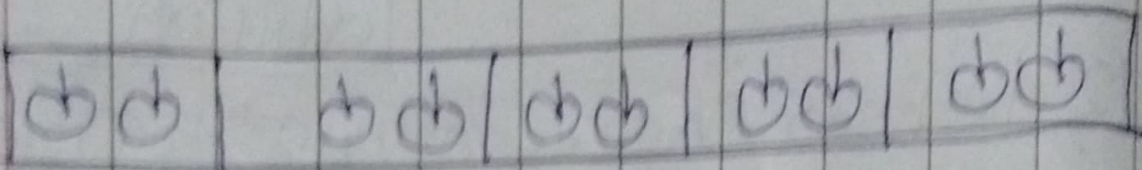
d. in $18 \div 3 = 6$, 18 is - dividend / divisor.

e. The symbol of division is \div / X

Q. Do as directed.

a. Write the facts.

5 boys share 10 apples. The facts are




$$10 \div 5 = 2 \text{ apples.}$$

$$2 \times 5 = 10 \text{ apples.}$$


b. Divide 18 by 3.

$$18 \div 3 = 6$$



c. 6 monkeys shared 12 mangoes equally.

How many mangoes did each monkey get?



$$\begin{array}{r} 12 \\ - 6 \leftarrow \textcircled{1} \\ \hline 6 \\ = 6 \leftarrow \textcircled{2} \end{array}$$

each monkey got 2
mangoes.

Q3. 5 girls share 25 lollipops equally.

How many lollipops does each child get?

No. of girls = 5

No. of lollipops = 25

So each girl get

$$= 25 \div 5 = 5$$

\therefore each girl will get

5 lollipops.

Q. Maya has 35 cherries. How many packets of 7 cherries each are there in each packet?

Ans No of Maya = 35

No of cherries = 7

So each packet get

$$35 \div 7 = 5$$

∴ There are 5 packets.