

WORKSHEET- DATA HANDLING




	No. of boys	No. of girls
1. came in school bus	28	9
Came walking	12	3
Came in their car	6	32

1. how many girls are in john's batch? Ans- 44

2. how many boys are in john's batch. 46

3. how many girls don't come walking. 41

4. how many boys came in the school bus and in their car. 34

II.	Types of fruit	Number of fruits	Tally marks
		9	
		5	
		8	
		3	
		6	
		2	

1. Which fruit is sold maximum?

Apple

2. Which fruit is sold the least?

Water melon