





- (1a) The 2-D shape has two dimensions
- (b) A shape that has 3 sides is triangle
- (c) There are 6 faces of a cube
- (d) The cylinder 3-D shape has no vertices but has flat faces.


(11a) Curved line -  straight line - 

(b) Rhombus - 

Hexagon - 

①

SHAPES



NAME

cuboid

cone

FLAT FACE

6

1

VERTICES

8

1

STRAIGHT EDGES

12

0

①

The distance from my house to my aunt's house is =  $2\text{km} + 3\text{km} + 1\text{km} = 6\text{km}$

②

The distance from my aunt's house to the milk booth =  $1\text{km}$

③

There is opposite to the shopping mall = Temple  $3\text{km} = 5\text{km}$

④

Every day I walk to school =  $2\text{km}$  and from school =  $2\text{km} = 4$