

Chapter-8

Date 01-01-22
Page ①

Geometry

1. Choose the correct answer and fill in the blanks.

(a) A triangle has 3 vertices.

(b) The Square has 4 equal sides.

(c) A Hexagon has 6 sides.

2. Write TRUE for correct answer and FALSE for wrong answer.


(i) A rectangle has 2 equal diagonals. True

(ii) A sphere has 2 flat faces. False

(iii) We draw straight lines by using a ruler. True

3. Do as directed.

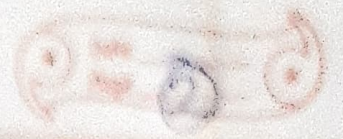
(i) Name the shapes



→ Triangle



→ Cube



(ii) Identify the shapes of given objects:



→ Cube



→ Cuboid

(iii) Circle the object having:

1 vertex



only flat faces




(iv) Write straight line or curved line:

C → Curved line

Z → Straight line

Count and write the correct numbers:


4.



Slanting lines - 7

Horizontal lines - 8

Vertical lines - 9



Triangles \rightarrow 9

Rectangles \rightarrow 11

Circles \rightarrow 6