

Chapter-7

GEOMETRY

SANRUDHI PUJAHARI  
 STD-3 SEC-B  
 SCHOOL NO.- 5882


WORKSHEET

I. Fill in the blanks :



- a) The 2-D shape has two curved lines.
- b) A shape that has 3 sides is Triangle.
- c) There are 6 faces of a cube.
- d) The Cylinder 3-D shape has no vertex but has flat faces .

II. Do as directed

- A) Draw a curved line and a straight line.
- B) Draw a hexagon and a rhombus.

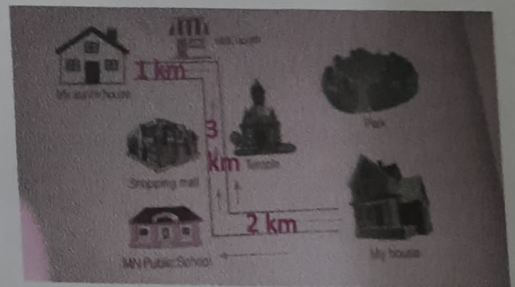


C) Fill up.

SHAPES		
NAME	<u>Cuboid</u>	<u>Cone</u>
FLAT FACES	<u>6</u>	<u>1</u>
VERTICES	<u>8</u>	<u>1</u>
STRAIGHT EDGES	<u>12</u>	<u>2</u>

D) Find out.

- 1) What is the distance from your house to your aunt's house? 1 km
- 2) What is the distance from your aunt's house to the milk booth? 6 km
- 3) What is there opposite to the shopping mall? Temple
- 4) Everyday how many kilometers do you need to walk to go to school and return back from the school? 6 km



----- END -----