

## Chapter-8

## Geometry

## WORKSHEET

1. Choose the correct answer and fill in the blanks.

a. A triangle has 3 vertices.

- i. 3      ii. 4      iii. 5

b. The square has 4 equal sides.

- i. cuboid      ii. cube      iii. square

c. A hexagon has 6 sides.

- i. triangle      ii. rectangle      iii. hexagon

2. Write TRUE for correct answer and FALSE for wrong answer.

i. A rectangle has 2 equal diagonals. (True)

ii. A sphere has 2 flat faces. (false)

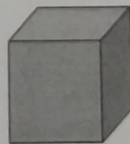
iii. We draw straight lines by using a ruler. (True)

3. Do as directed.

i. Name the shapes



triangle




cube

ii. Identify the shapes of given objects.



cube



cuboid

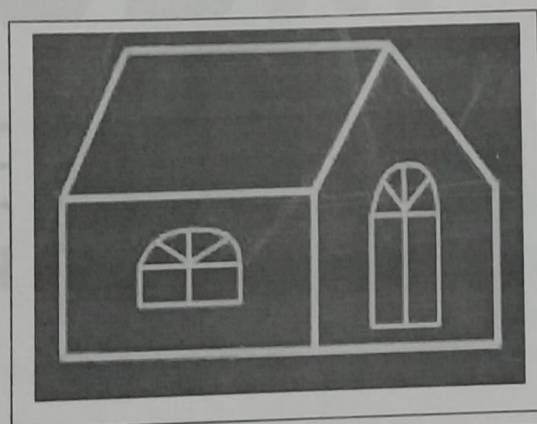
iii. Circle the object having:

1 vertex			
Only flat faces			


iv. Write straight line or curved line.

	Curved		Straight
--	--------	--	----------

4. Count and write the correct numbers.



Slanting lines	<u>3</u>
Horizontal lines	<u>3</u>
Vertical lines	<u>3</u>



Triangles	<u>9</u>
Rectangles	<u>17</u>
Circles	<u>6</u>

XXX