

Chapter- 7

GEOMETRY


WORKSHEET

I. Fill in the blanks :



- a) The 2-D shape has two side.
- b) A shape that has 3 sides is triangle.
- c) There are six faces of a cube.
- d) The sphere 3-D shape has no vertex but has flat faces .

II. Do as directed

- A) Draw a curved line and a straight line.
- B) Draw a hexagon and a rhombus.




C) Fill up.

SHAPES		
NAME	<u>Cuboid</u>	<u>cone</u>
FLAT FACES	<u>6</u>	<u>1</u>
VERTICES	<u>8</u>	<u>1</u>
STRAIGHT EDGES	<u>12</u>	<u>0</u>

D) Find out.

- 1) What is the distance from your house to your aunt's house? 6 km
- 2) What is the distance from your aunt's house to the milk booth? 1 km
- 3) What is there opposite to the shopping mall? temple
- 4) Everyday how many kilometers do you need to walk to go to school and return back from the school? 4 km



----- END -----