

Man: The Living Machine

Date _____

Page _____

A. Name the system responsible for.

1. Circulation of blood - Circulatory system.

2. Breathing - Respiratory system

3. Give shape to body - Skeletal system.

4. Breaking food for absorption - Digestive system

5. Receiving messages from nerves - Nervous system

B. Tick the correct answer.

1. The skin, eyes and lungs are

examples of organs -

a. Organ system

✓ Organs

c. Cells

2. The muscles pull the bones to make them move.

✓ Muscles ✓

b. Lungs

c. Kidneys

3. Digestion begins in the mouth.

✓ Mouth ✓

b. Stomach

c. Small intestine

4. Which of these organs controls all the system in the body?

a. Heart

b. Kidney

✓ d. Brain ✓

5. The heart pumps blood to different parts of the body.

a. liver

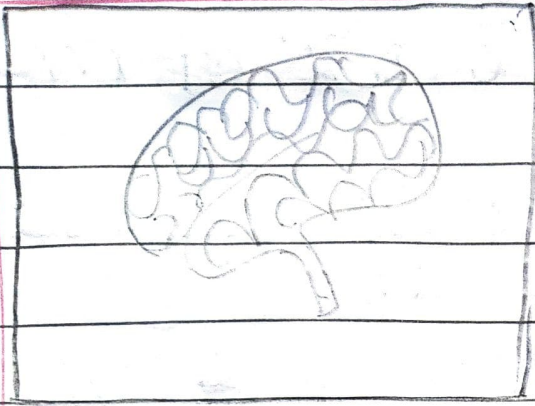
✓ b. heart ✓

c. both a & b


c. Fill in the blanks.

1. The food that cannot be digested goes to the large intestine.

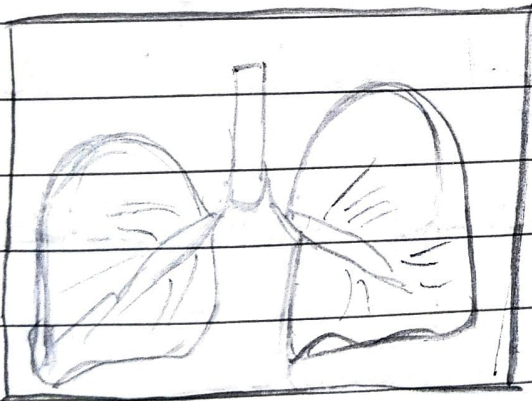
2. The heart pump blood to all parts of the body.
3. The kidneys remove urine.
4. The nervous system consists of the brain, the spinal cord and nerves.
5. The respiratory system supplies oxygen to various parts of our body.
6. Match the organ to the system it belongs.




Digestive system



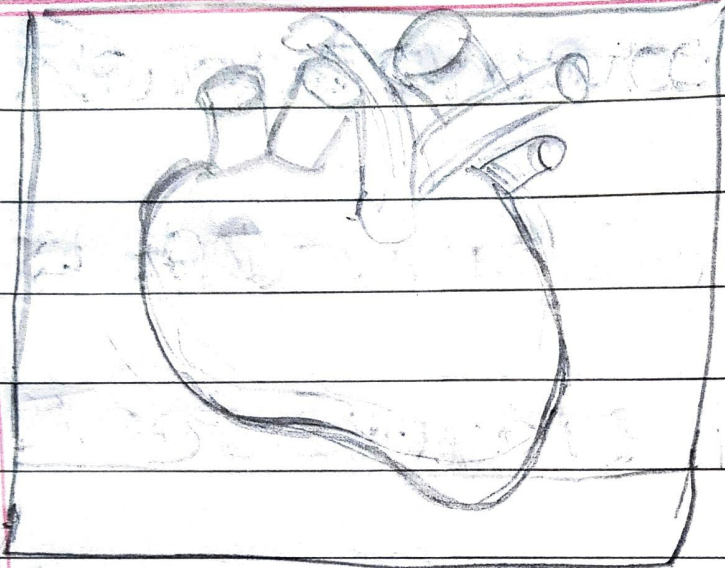
Nervous system



Excretory system



Respiratory system



→ circulatory system