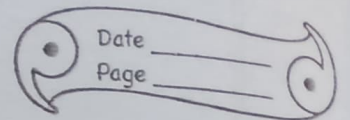


# Ch- WORKSHEET

5

## Place Value and



### Face Value

Q1. Choose the correct answer and fill in the blank.

a. Place value and face value will be the same in ones place. (ones, tens, hundreds)

b. 71 has more tens. (48, 50, 71)

c. The place value of 3 in 37 is 30. (3, 30, 70)

d. 9 comes just before

the smallest 2 digit number. (9, 99, 10)

e. The number system contains 10 digits.  
(10, 16, 4)

Q2. Write True or False for the following statements.

a. The face value of 7 in 75 is 7. True

b. The place value of 5 in 65 is 5 tens.

False

c. Each spike in an abacus can have

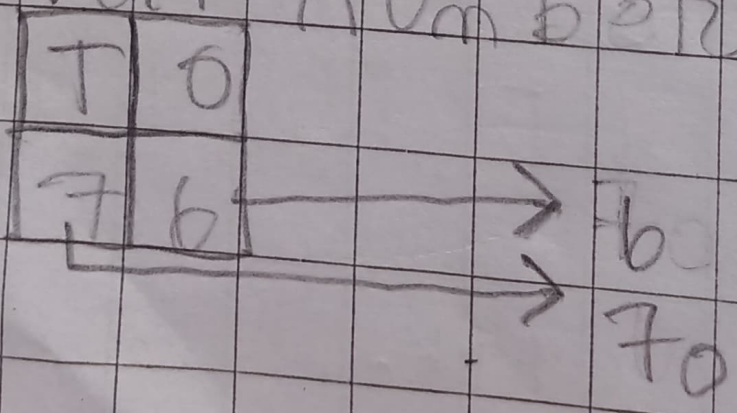
maximum 9 beads only.  
True

d. Expanded form of 95  
is equal to  $9 + 5$ .  
False

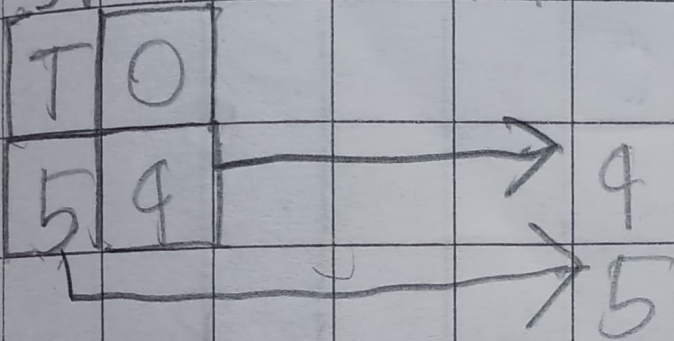
e. Compact form of  $30 + 6 = 36$ . True.

Q.2. Do as directed.


a. Write the place value of the digits in the given number.



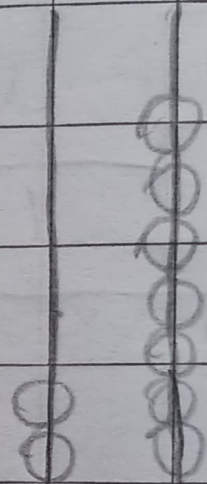
b. Write the face value of the digits in the given number.



c. Write the numbers shown on the abacus.



T O 57



T O 27

d. Write the numbers in expanded form.

i.  $47 = 40 + 7$

ii.  $72 = 70 + 2$

iii.  $56 = 50 + 6$

iv.  $23 = 20 + 3$

e. Write in compact form.

i.  $60 + 4 = 64$

ii.  $5 \text{ tens} + 8 \text{ ones} = 58$

iii.  $0 \text{ ones} + 4 \text{ tens} = 40$

iv.  $30 + 4 = 34$