

Chapter- 7

# GEOMETRY

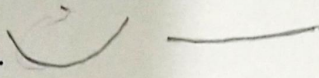
## WORKSHEET

I. Fill in the blanks :

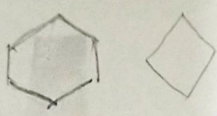
- a) The 2-D shape has two Dimension.
- b) A shape that has 3 sides is Triangle.
- c) There are 6 faces of a cube.
- d) The Cylinder 3-D shape has no vertex but has flat faces .

II. Do as directed



A) Draw a curved line and a straight line.



B) Draw a hexagon and a rhombus.

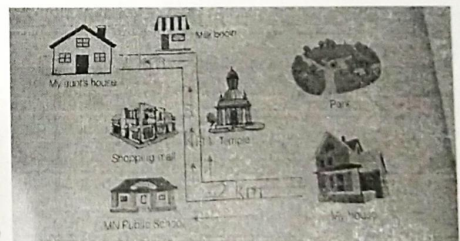


C) Fill up.

SHAPES		
NAME	<u>Cuboid</u>	<u>Cone</u>
FLAT FACES	<u>6</u>	<u>1</u>
VERTICES	<u>8</u>	<u>1</u>
STRAIGHT EDGES	<u>12</u>	<u>0</u>

D) Find out.

- 1) What is the distance from your house to your aunt's house?
- 2) What is the distance from your aunt's house to the milk booth?
- 3) What is there opposite to the shopping mall?
- 4) Everyday how many kilometers do you need to walk to go to school and return back from the school?



- 1) The distance from our house to our aunt's house is 6 km.
- 2) The distance from our aunt's house to milk booth is 1 km.
- 3) The opposite of the shopping mall is our aunt's house.
- 4) 2 km.