

Name-Rudransh Behera

School no.-6519

Std-III Sec-B

Math-Ch-7-Geometry

I Fill in the blanks:-


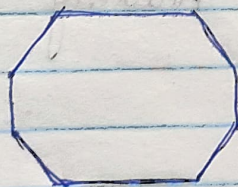
- a) The 2-shape has 2 sides.
- b) A shape that has 3 sides are called 3-d shapes.
- c) There are 6 faces of a cube.
- d) The cylinder 3-d shape has no vertex but has flat face.

II- Do as directed:-



A) Draw a curved line and a straight line.



B) Draw a hexagon and a rhombus.



C- Fill up:-

| | | |
|----------------|---|---|
| Shapes |  |  |
| Name | Cuboid | Cone |
| Flat faces | 6 | 1 |
| Straight edges | 12 | 2 |
| Vertices | 8 | 1 |

D- Find out:-

1- 3 Km

3- Temple.

2- 1 Km

4- 4 km