

## WORKSHEET

1. a) The 2-D shape has two dimensions

b) A shape that has 3 sides is  
triangle

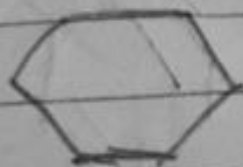
c) There are 6 faces of  
a cube

d) The Cylinder 3-D shape has no  
vertex but has flat faces


II A) Curved line                      Straight line




B. Hexagon



Rhombus



Q) Shapes



Name

Cuboid

Cone

Flat face

6

1

Vertices

8

1

Straight edges

8

0

- 1) The distance from your house to your aunt's house is 6 km
- 2) The distance from your aunt's house to the milk booth is 1 km
- 3) The opposite of the shopping mall is the temple
- 4) Everyday 2 km I need to go

walk to go to school and  
return back from the school