

I - Fill in the blanks:-

- a) My pen is 10 cm long.
- b) The len length of a river is measured in km.
- c) $1 \text{ m} = \underline{100} \text{ cm}$
- d) $1 \text{ kg} = \underline{1000} \text{ g}$

II - Do as directed:-

$ \begin{array}{r} \text{A-1- } 100 \\ \times 14 \\ \hline 400 \\ 100 \\ \hline 1400 \\ + 30 \\ \hline 1430 \end{array} $	$ \begin{array}{r} 2-100 \\ - 83 \\ \hline 300 \\ 800 \\ \hline 88300 \end{array} $
--	---

B - Convert the following into metres:-

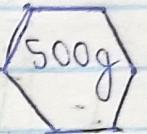


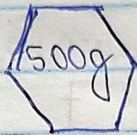
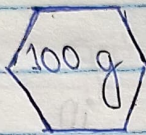

$$\begin{array}{r}
 1- \quad 100 \overline{) 796} \\
 \underline{-700} \\
 96
 \end{array}$$

$$\begin{array}{r}
 2- \quad 100 \overline{) 796} \\
 \underline{-700} \\
 96
 \end{array}$$

C- Circle the weights that you will measure the

following:-

1- 2 kg apples



D- Tick the things that are used to measure

length:-

