

Chapter- 8

MEASUREMENT

WORKSHEET

I. Fill in the blanks :

- a) My pen is 10 cm long.
- b) The length of a river is measured in metre.
- c) 1 m = 100 cm
- d) 1 kg = 1000 g

II. Do as directed

A) Convert the following into centimetres:

- 1) 14 m 30 cm 2) 83 m A) 1- 1430 cm , 2) 8300 cm

B) Convert the following into metres:

- 1) 796 cm 2) 796 cm A) 1- 7 m, 96 cm

C) Circle the weights that you will use to measure the following:

1) 2 kg apples

EDUCATIONAL GROUP
Changing your Tomorrow

200g

100g


500g

1kg


2kg

500g


D) Tick the things that are used to measure length:




✓




✓




✓




✓




✓



✓



✓



✓

----- END -----