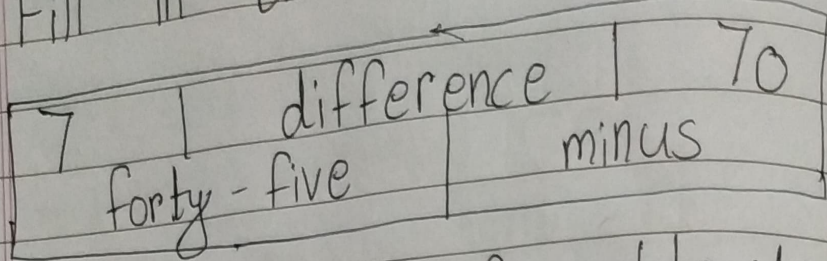


# Chapter - 7

## subtraction

① Fill in the blanks.



a. The answer of subtraction is known as difference.

b. The sign used for subtraction is called minus —.

c. The difference of 14 and 7 is 7.

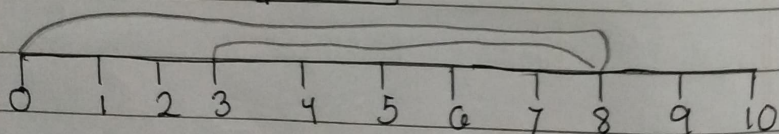
d. Take away 10 from 80 gives \_\_\_\_\_.

2. Do as directed.

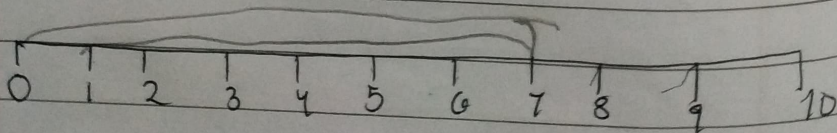
a. Subtract by counting backward

on a number line.

$$8 - 5 = \boxed{3}$$



$$7 - 6 = \boxed{\quad}$$



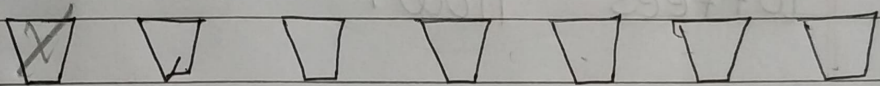
b. Subtract the following.  
(with out borrowing)

$$\begin{array}{r} \text{T} \quad 0 \\ 4 \quad 8 \\ - 2 \quad 7 \\ \hline 2 \quad 1 \end{array}$$

$$\begin{array}{r} \text{T} \quad 0 \\ 9 \quad 6 \\ - 9 \quad 2 \\ \hline 0 \quad 4 \end{array}$$

c. Cross out to subtract.

$$15 - 9 = \underline{6}$$



d. Count backward and subtract.

$$23 - 5 = \underline{18}$$

(23)

(22)

(21)

(20)

(19)

(18)

Q3. Solve the questions.

a. Subtract the following.

$$\begin{array}{r} 3 \quad 13 \\ \text{T} \quad 0 \\ 4 \quad 3 \\ - 7 \\ \hline 3 \quad 6 \end{array}$$

$$\begin{array}{r} 6 \quad 15 \\ \text{T} \quad 0 \\ 7 \quad 5 \\ - 1 \quad 9 \\ \hline 5 \quad 6 \end{array}$$

$$\begin{array}{r} 7 \quad 12 \\ \text{T} \quad 0 \\ 8 \quad 2 \\ - 7 \quad 8 \\ \hline 0 \quad 4 \end{array}$$

b. Solve it.

Rohan has 25 toffees. He gives 15 toffees to his friend Rahul. How many toffees left with him?

Number of toffees Rohan has =	25
Number of toffees he gives away =	15
Number of toffees left with him =	10

So, he has 10 toffees now.