

1) fill in the blanks.

(a) Thursday comes after wednesday

(b) July comes before August

(c) Republic Day is celebrated on 26
of January.

(d) The longer hand is the minute hand.


(e) The time from Morning to Evening is known
as a.m.

2) write the time shown by each clock.

(a)




Quarter past 1 or
1:15




Quarter to 5 or 4:45

(b)

Draw the hands according to the given time.



Quarter to 11



Quarter past 1

(c) which days are known as weekend?

write the names in the given box.

Sunday | Saturday

(d) write the given months in the correct

tray.

AUGUST ✓

NOVEMBER ✓

FEBRUARY

Having 31 days

Having 30 days

(e) write the missing days

MONDAY, Tuesday, WEDNESDAY

Thursday, FRIDAY

(3) Match the following

A

B

Saturday

Hour hand

Half past 3

Leap year

12 months

3:30

366 days

1 year

6th day of the week

shorter hand