

# Chapter - 10

## Division worksheet

① Circle the correct option.

a. Division is repeated Substraction / addition.

b. 12 toffees shared among 4 friends. Each one gets three / four toffees.

c. The answer to division is remainder / quotient.

d. In  $18 \div 3 = 6$ , 18 is devidend / devisor.


e. The symbol of division is  $\div$  /  $\times$ .

② Do as directed.

(a) Write the facts.

5 boys share 10 apples.

The facts are -

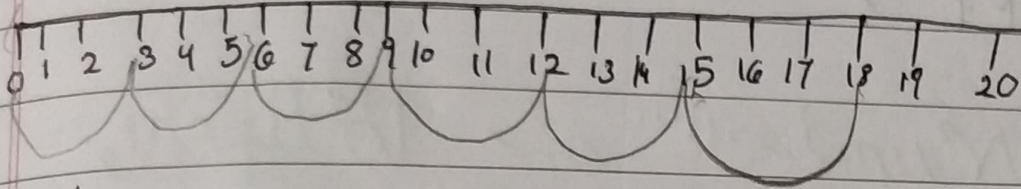


$$10 \div 5 = \underline{2} \text{ apples}$$

$$2 \times 5 = \underline{10} \text{ apples}$$

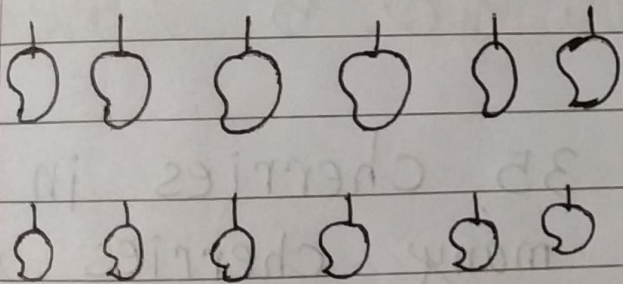
b. Divide 18 by 3.

$$18 \div 3 = \boxed{6}$$



c. Show as repeated subtraction.

6 monkeys shared 12 mangoes equally. How many mangoes did each monkey get?



$$\begin{array}{r} \text{T O} \\ 12 \\ - 6 \quad -1 \\ \hline 6 \\ - 6 \quad -2 \\ \hline 0 \end{array}$$

∴ So each monkey got

2 mangoes

③ Solve the word problems.

a. 5 girls share 25 lollipops equally.

How many lollipops does each child get?

Ans → Number of lollipops = 25

Number of girls = 5

Each girl get =  $25 \div 5 = 5$

∴ Each girl got 5 lollipops

④ Maya puts 35 cherries in 7 packets. How many cherries are there in each packet?

Ans - Number of cherries - 35

Number of packets - 7

Cherries in each packet -

$$35 \div 7 = 5$$

∴ So there are 5 cherries in each packet.