

Chapter - 11  
Measurement  
Worksheet

Q.1 Write true or false for correct statement and false for false statement

a. An elephant is heavier than a tiger.  
True

b. Giraffe is shorter than a deer.  
FALSE

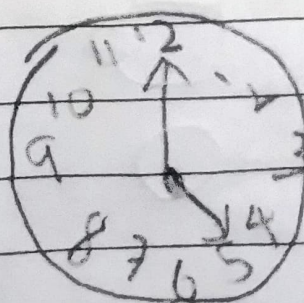
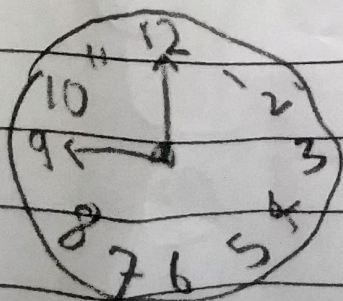
c. Monday comes just after Sunday.  
FALSE

d. A leap year has 29 days.  
False

e. A long hand also called a minute hand.  
False

Q.2 Do as directed

a. Write the time shown on the clock.

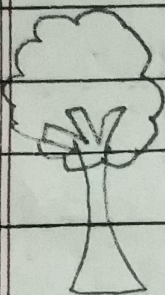


9 o'clock



12:15

b. Circle the following



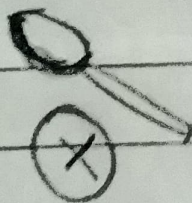
The animal farthest to the tree



II Short object



c. Tick the object which has more capacity and cross the object which has least capacity in the group



d. colour the month in green which having 31 days and yellow which having 30 days

June

March

April

July

February

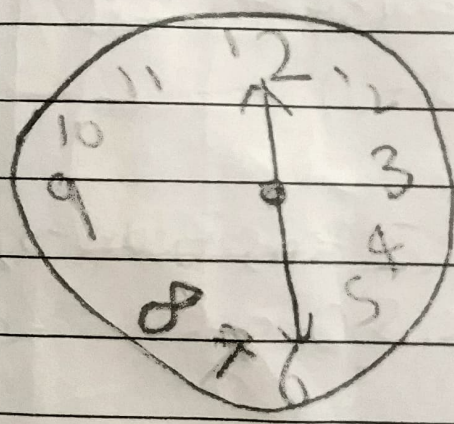
August

September


May

November

e. Draw the two hands of the clocks to tell the given time



6:00 clock



3:30 clock