

# CHAPTER-9

## Measurement


### WORKSHEET



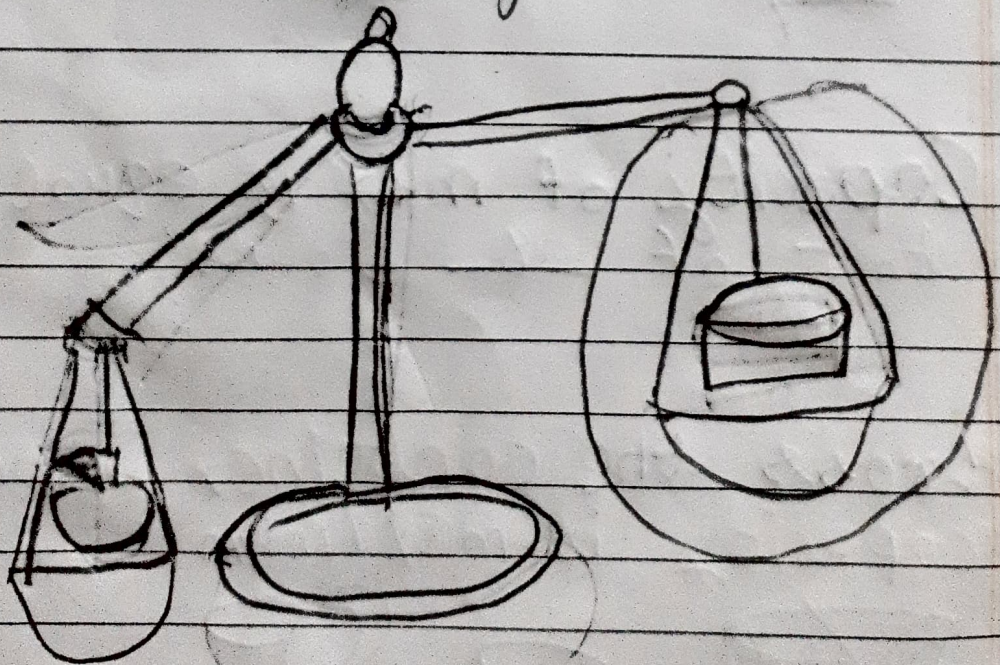
1. Choose the correct answer and fill in the blanks.
  - a) The body parts are the non-standard units of length.
  - b) Length of an object may be measured by some other smaller objects.
  - c) Objects which are used to measure the length of other objects are called standard.
  - d) The pan having more weight moves down.
  - e) Weight gives us an idea of whether an object is heavy or light.

2. Do as directed



i. Tick the heavier object.





ii. Circle the lighter object.



iii Colour the heaviest objects






iv:



Capacity of mug is equal to that of 8 bowls

v. Cross the container whose capacity is maximum



3.i. Fill in the blanks after measuring the objects using given arbitrary and non standard units.


a) Your pencil box is 6 eraser long.

b) Width of the door is 3 cubit long.

c) My room's length is 18 steps long.

ii. Draw the picture.

A cubit



A hand span

