

Chapter- 9

Measurement

WORKSHEET

1. Choose the correct answer and fill in the blanks.

a. The body parts are the non-standard units of length.

- i. arbitrary ii. non-standard

b. Length of an object may be measured by some other smaller objects.

- i. smaller ii. bigger

c. Objects which are used to measure the length of other objects are called arbitrary.

- i. arbitrary ii. standard

d. The pan having more weight moves down.


- i. up ii. down

e. weight gives us an idea of whether an object is heavy or light.


- i. length ii. weight

2. Do as directed


i. Tick the heavier object.




ii. Circle the lighter object




iii. Colour the heaviest object.



iv.



v. Cross the container whose capacity is maximum.



3.i.Fill in the blanks after measuring the objects using given arbitrary and non-standard units.


a.Your pencil box is pencil erasers long.

b.Width of the door is door cubits long.


c.My room's length is room's steps long.

ii.Draw the pictures.

A cubit



A handspan



cubit x hand span