

# Chapter-9



Q1 choose the correct answer and fill in the blanks

a multiplication is repeated, addition

b 3 groups of 5 is equal to 15

c 4 taken 6 time make 24

d  $6 + 6 + 6$  can also be written as  $3 \times 6$

e 5 fives are 2 tens 5 ones

Q2 match the following.

a 7 groups of 5      a Seventy-two

b 5 taken 9 times      b Eighteen

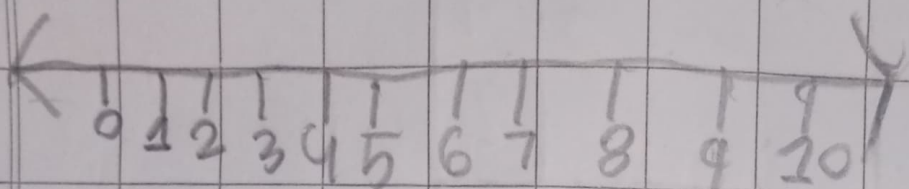
c nine twos are      c Twenty

d 8 times      d Thirty-five

e  $9 \times 8$       e Forty-eight


a) multiply one number line

a



$$4 \times 2 = 8$$

b) Fill in the blanks




3 groups of 4 apple = 12

$$3 \times 4 = 12$$

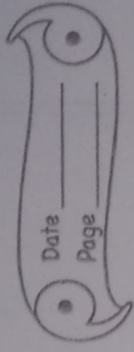
c multiply and write the ans

T	0	H	0
4	3	2	9
4	2	X	2
8	6	9	8

d There are 5 Flower in a pot.  
How many Flower will be in  
there in 6 such pots



T	0
X	5
3	0



6  
e multiply and write the product

10	10
3	1
48	53
X	X
192	318