

Chapter - 9
Multiplication
Worksheet

NAME - Sneha shrita Jona
SCHOOL NO - 7883


- Q1 Choose the correct answer and fill in the blanks
- (a) Multiplication is repeated addition (addition, subtraction, division)
- (b) 3 groups of 5 is equal to 3×5 ($5+5+5$, $3+5$, 3×5)
- (c) 4 taken 6 times make 24 (24 , 2 , 20)
- (d) $6+6+6$ can also be written as 3×6 (3×6 , 6×3 , $3+6$)
- (e) 5 fives are 2 tens 5 ones (2 tens - 5 ones, 5 tens 2 ones, 2 tens 0 one)

Q2 Match the following.

- | | |
|--------------------|----------------|
| a) 7 groups of 5 | a) Seventy two |
| b) 5 taken 4 times | b) Eighteen |
| c) Nine tens are | c) Twenty |
| d) 8 times 6 | d) Thirty-five |
| e) 9×8 | e) Forty-eight |

Q3 Do as directed.


a) Multiply on a number line.



$$\boxed{4} \times \boxed{2} = \boxed{8}$$

b) Fill in the blanks.

3 groups of 4 apples = 12



~~3~~


$$\underline{\quad 3 \quad} \times \underline{\quad 4 \quad} = \boxed{12}$$

c) Multiply and write the answers,

T	0
4	3
x	2
8	6

H	T	0
2	3	4
x		2
4	6	8

d) There are 5 flowers in a pot. How many flowers will be there in 6 such pots?



T	0
	6
x	5
3	0

e) Multiply and write the product-

T	0
3	
4	8
x	4
18	6

T	0
1	
5	3
x	6
31	8