

Chapter- 11

PATTERNS

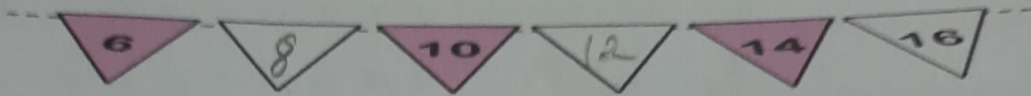



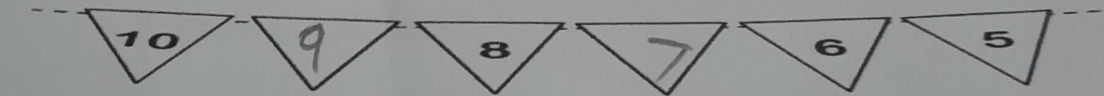




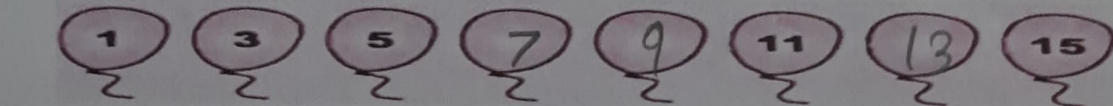
WORKSHEET

SAMRUDHI PUJAHARI

STD - 3 SEC - B

SCHOOL NO :- 5882

I. Complete the following :

1. 
2. 
3. 
4. 
5. 
6. 
7. 
8. 
9. 
10. 

II. Do as directed :

Find the pattern rule.

1. 6, 8, 10, 12, 14, 16, 18, 20 Add 2
2. 56, 49, 42, 35, 28, 21, 14, 7 Subtract 7
3. 45, 40, 35, 30, 25, 20, 15, 10 Subtract 5
4. 12, 15, 18, 21, 24, 27, 30, 33 Add 3
5. 11, 22, 33, 44, 55, 66, 77, 88 Add 11

ODM

— END —

EDUCATIONAL GROUP

Creating Your Tomorrow