

Chapter- 11

PATTERNS

WORKSHEET

I. Complete the following :

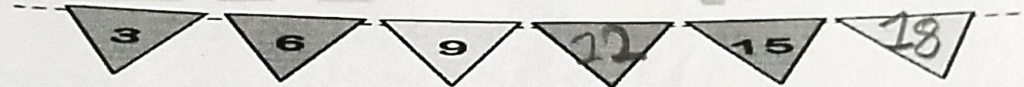
1.



2.



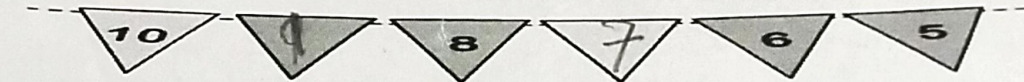
3.



4.



5.



6.



7.




8.



9.



10.




II. Do as directed :

Find the pattern rule.

1. 6, 8, 10, 12, 14, 16, 18, 20 start at 6 add 2 each time
2. 56, 49, 42, 35, 28, 21, 14, 7 start at 56 subtract 7 each time
3. 45, 40, 35, 30, 25, 20, 15, 10 start at 45 add 5 each time
4. 12, 15, 18, 21, 24, 27, 30, 33 start at 12 add 3 each time
5. 11, 22, 33, 44, 55, 66, 77, 88 start at 11 add 11 each time

ODM



----- END -----

EDUCATIONAL GROUP

Changing your Tomorrow