


Name - Arunghati Patra
Class - 1 Sec - 'C'



Choose the correct answer and fill in the blank.

a) Place value & face value

will be the same in ones place. (ones, tens, hundreds)

b) 71 has more tens.

(48, 50, 71)

c) The place value of 3 in 37 is

30. (3, 30, 70)

d) 10 comes just before the smallest 2-digit number.

(9, 99, 10)

e) The number system contains

10 digits. (10, 11, 9)

Q2. Write True or False following statements.

a. The Face value of 7 in 75 is 7. True

b. The place value of 5 in 65 is 5 tens. False

c. Each spike in an abacus can have maximum 9 beads only.

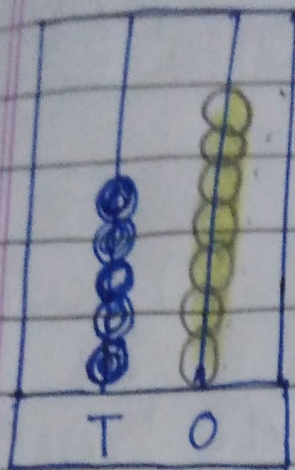
T

d. Expanded form of 95 is equal to $9+5$. True

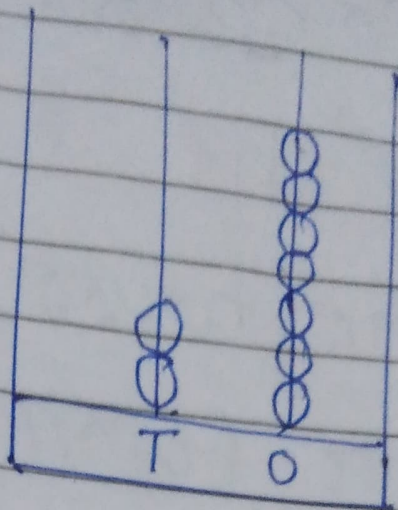
e. Compact form of $30+6=36$

True

c write the numbers shown on the abacus.



57



27

d write the numbers in expanded Form.

i $97 = 90 + 7$

ii $72 = 70 + 2$

iii $56 = 50 + 6$

iv $23 = 20 + 3$

e write in compact Form.

i $60 + 4 = \underline{64}$

ii $5 \text{ tens} + 8 \text{ ones} = \underline{58}$

iii $0 \text{ ones and } 4 \text{ tens} = \underline{40}$

iv $30 + 9 = \underline{39}$