


Chapter-2

MAPS



I. Fill in the blanks

1. A globe is representation of the Earth.
2. Physical map shows different land masses in an area.
3. The science of making maps is called cartography.
4. map is a representation of the earth or part of it, on a flat surface.
5. A map scale shown as a line with divisions marked on it is called linear scale.

II. cross out the wrong word from the bracket to make the sentence correct

- I. (A globe ~~a map~~^X) is a ~~model~~ model of earth.

2. A map which shows the climate of a country is a ~~physical map~~ / thematic map

3. Pictures or signs used in a map to represent something from the real world (~~legend~~ / symbols)

4. A book of maps is called Atlas, ~~dictionary~~

5. (yellow / ~~red~~) colours shows ~~plateaus~~ plateaus on map.

III. choose the correct answer

1. Which of these maps will always have some errors?

- a. Map of your house
- b. Map of your school
- c. Map of your neighbourhood
- d. Map of the world

2. What does a political map show?

- a. Features such as mountains, plains and rivers
- b. Roads, railway and airline routes
- ✓ c. Boundaries of countries, states and important cities.
- d. Number of seats won by political parties in an election.



3. On a map 1000 km is shown as 1 cm. The scale of the map is:

- a. 1000 km : 1 cm
- ✓ b. 1 cm : 1000 km
- c. 100 km : 1 cm
- d. 1 cm : 100 km

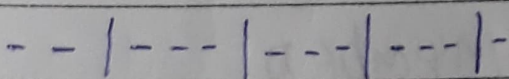
4. Blue colour in a map always shows:

- a. plain land
- b. Hills
- ✓ c. water bodies
- d. Marshy land

5. Which of these symbols represents a boundary between countries

- a. - - - - -
- ✓ b. 
- c. — . — . — .
- d. 

IV. Match it

- | | |
|--|-------------------------|
| 1. Light blue | a. railway line |
| 2. physical map | b. North |
| 3. Arrow marked N on map | c. shallow water |
| 4. Plains | d. mountains and rivers |
| 5.  | e. green |

Ans - 1-c, 2-d, 3-b, 4-e, 5-a