

Chapter- 9

Measurement

WORKSHEET

1. Choose the correct answer and fill in the blanks.

a. The body parts are the arbitrary units of length.

- i. arbitrary ii. non-standard

b. Length of an object may be measured by some other bigger objects.

- i. smaller ii. bigger

c. Objects which are used to measure the length of other objects are called standard.

- i. arbitrary ii. standard

d. The pan having more weight moves up.


- i. up ii. down

e. weight gives us an idea of whether an object is heavy or light.


- i. length ii. weight

2. Do as directed

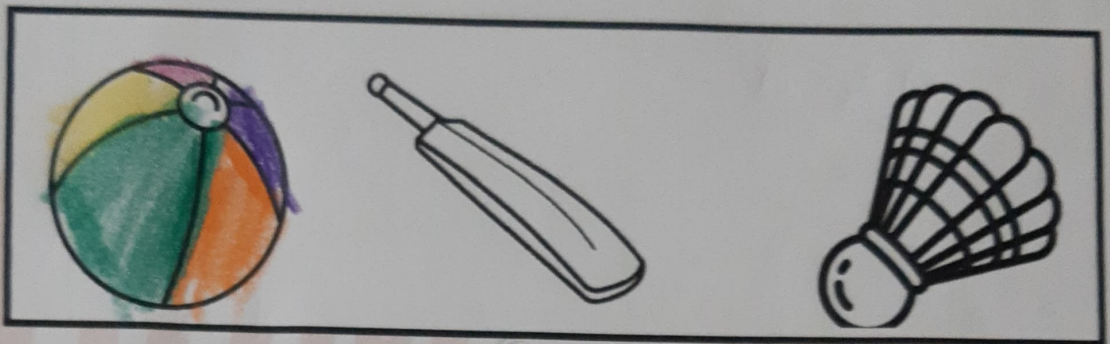
i. Tick the heavier object.



ii. Circle the lighter object



iii. Colour the heaviest object.



iv.

Capacity of mug is equal to that of 8 bowls.


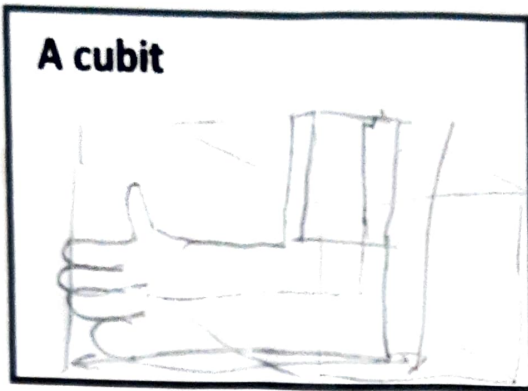
v. Cross the container whose capacity is maximum.



3.i.Fill in the blanks after measuring the objects using given arbitrary and non-standard units.

- a. Your pencil box is arbitrary erasers long.
- b. Width of the door is non standard cubits long.
- c. My room's length is arbitrary steps long.

ii. Draw the pictures.



x