

# Chapter-7

## Geometry

{Worksheet}


Date \_\_\_\_\_  
Page \_\_\_\_\_


1. Fill in the blanks:-

- (i) The 2-d shape has two dimensional.
- (ii) A shape that has three sides is Triangle.
- (iii) There are 6 faces of a cube.
- (iv) The cylinder 3-d shape has no vertex but has flat faces.

2. Do as directed:-


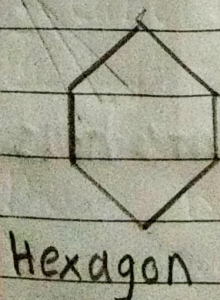
(i) Draw a curved line and a straight line:-

Ans-  Curved line



 Straight line

(ii) Draw a hexagon and a rhombus.

Ans-



(iii) Fill up:-

Shapes		
Names	Cuboid	Cone
Flat Faces	6	1
Vertices	8	1
Straight Edges	12	0

(iv) Find out:-

a) What is the distance from your house to your aunt's house?

Ans- 6 km

b) What is the distance from your aunt's house to the milk booth?

Ans- 1 km

c) What is there opposite to the shopping mall?

Ans- Temple

d) Every day how many kilometres do you need to walk to go to school and return back from the school?

Ans- 4km