

40203 = _____

B. Write the number shown on each abacus.

1

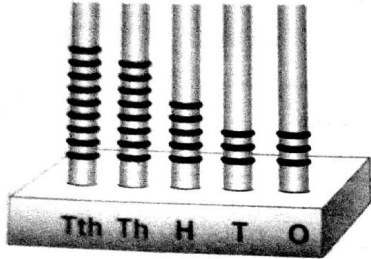


Figure 98533
Words Ninety eight thousand
Five hundred thirty-three

2

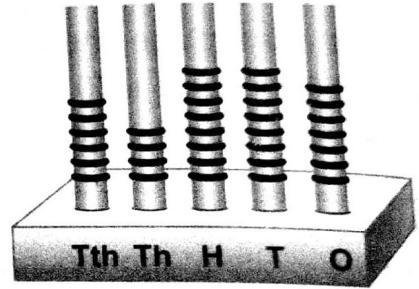


Figure 64887
Words Sixty four thousand eight
hundred eighty seven

3




Figure 44593
Words Forty four thousand five
hundred ninety three

4




Figure 79897
Words Seventy nine thousand
eight hundred ninety seven

5




Figure 78644
Words Seventy eight thousand
six hundred thirty-three

6


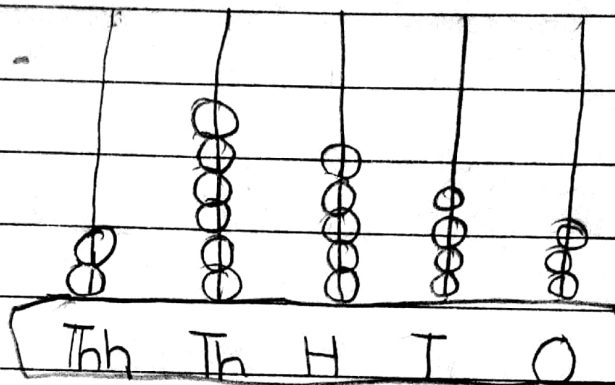


Figure 65775
Words Sixty five thousand seven
hundred seventy five

HOME WORK Exercise 2 (K)

c. Draw each of the following numbers on an abacus in your notebook.

a. 27543-



b. 32546-

