


Exercise

1. Look at the following numbers and fill in the blanks.



(a) 15 comes before 16

(b) 17 comes after 16

(c) 11 comes before 12

(d) 19 comes after 18


(e) 14 comes between 13 and 15


(f) 12, 13 and 14 come between 11 and 15.

2. What comes just before :

(a)  24


(b)  73

(c)  11

(d)  49

(e)  10

(f)  57

(g)  60

(h)  35

(i)  62