
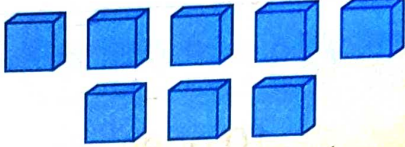


Exercise



1. Count the following in tens and ones.

(a)

Tens	Ones
	



$$\boxed{1} \text{ Tens} + \boxed{8} \text{ Ones} = \boxed{1} \boxed{8}$$

(b)

Tens	Ones
	

$$\boxed{4} \text{ Tens} + \boxed{1} \text{ One} = \boxed{4} \boxed{1}$$

(c)

Tens	Ones
	

$$\boxed{2} \text{ Tens} + \boxed{5} \text{ Ones} = \boxed{2} \boxed{5}$$