

## EXERCISE 17(A)


- 1 The table below represents the favourite fast foods of children. Read carefully and answer the questions given below.

Pizza	IIII
Burger	IIII III
Sandwich	IIII
Noodles	IIII I
Pasta	II

- (a) Which food is the most popular among the students ?
- (b) Which is the least popular food among the students ?
- (c) How many children are represented in the table altogether ?
- (d) Number of children who like noodles is \_\_\_\_\_ .
- (e) How many children like pizza and burger ?
- (f) How many children like sandwich and pasta ?
- (g) Number of children who like noodles and pizza is \_\_\_\_\_ .

Burger  
Pasta  
25  
6  
13  
6  
11

2 The following pictograph shows the weekly sale of shakes and juices at a juice corner. Read and answer the questions carefully.



[Each glass represents 20 glasses of juice and shake.]

- (a) What is the weekly sale of shakes at the juice corner ?
- (b) Which juice or shake is the most popular ?
- (c) What is the total sale of mixed fruit juice and orange juice together ?
- (d) Which juice or shake is the least popular ?
- (e) How many glasses of banana shake are sold in a week ?
- (f) What number of glasses of strawberry shake are sold in a week ?
- (g) How many glasses of chocolate shake and pineapple juice are sold ?
- (h) What is the sale of pineapple juice ?

320 glasses

chocolate glass

260 glasses

Strawberry shake

100 glasses






60 glasses



240 glasses

80






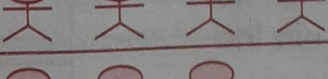

- 3 The pictograph below shows the musical instruments which students play in a music school. Answer the following questions after observing the pictograph carefully.


Guitar	
Piano	
Flute	
Tabla	
Harmonium	

Scale :  = 500 children ;  = 250 children

- (a) How many students are there in the music school ? 8,250
- (b) How many children like to play guitar ? 2,750
- (c) What is the number of students who love to play harmonium ? 1,500
- (d) Which instrument is the most popular ? Guitar
- (e) Which instrument is the least popular ? Flute
- (f) How many children like to play flute and tabla ? 2,000
- (g) What is the number of children who love to play piano and harmonium ? 3,500
- (h) How many children love to play guitar and flute ? 3,500

- 4 The table below shows the games which are played in a school. Answer the following questions after observing the pictograph carefully.

Cricket	
Carrom	
Chess	
Badminton	
Basket ball	

Each () represents 50 students.

- (a) How many students love to play a game ? 800 students
- (b) How many students love to play chess ? 50 students
- (c) Which game is the most popular among children ? Cricket
- (d) Which game is the least popular among children ? chess
- (e) How many students play carrom and chess ? 150 students
- (f) How many students love to play badminton ? 200 students
- (g) How many students love to play basketball and badminton ? 350 students
- (h) How many children play cricket ? 300 students
-