







CW
21/11/22
1)

Pizza	
Burger	
Sandwich	
Noodles	
Pasta	

- a) Which food is the most popular among the students? Burger.
- b) Which is the ~~most~~ least popular food the students? Pasta.
- c) How many children are represented in the table altogether? 25.

- d) Number of children who like noodles is six.
- e) How many children like ~~noodles~~ pizza and burger? 13.
- f) How many children ~~like~~ like sandwich and pasta? six.
- g) Number of children who like noodles and pizza is 11.

2)

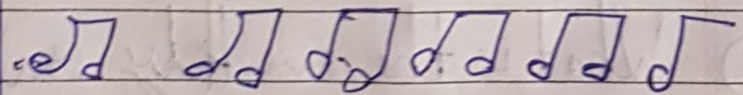
Mixed fruit Juice	
Orange juice	
Pinapple Juice	
Chocolate shake	
Strawberry shake	
Banana shake	

- a) What is the weekly sale of shakes at the Juice corner?
~~320~~ 320 shakes
- b) Which juice or shake is the most Popular?
chocolate shake
- c) What is the total sale of mixed fruit juice and orange juice together?
260

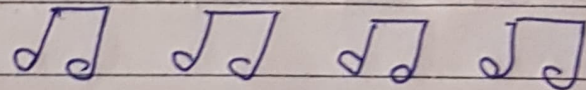
- d) Which juice or shake is the least popular? strawberry
- e) How many glasses of banana shake are sold in a week? 100
- f) What number of glasses of Strawberry shake are sold in a week? 60
- g) How many glasses of chocolate shake and pineapple juice are sold? 240
- h) What is the sale of pineapple juice? 80

3)


Guitar




Piano



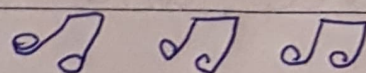
Flute



Tabla


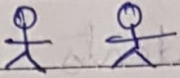

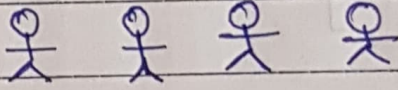




Harmonium



Scale: $\sqrt{\sqrt{\quad}}$ = 500 children, $\sqrt{\quad}$ = 250 children

- a) How many students are there in the music school? 8350
- b) How many children like to play guitar? 2700
- c) What is the number of students who love to play harmonium? 1500
- d) Which instrument is the most popular? Guitar
- e) Which instrument is the least popular? Flute ~~Flute~~
- f) How many children like to play flute and tabla? 3000
- g) What is the number of children who love to play piano and harmonium? 3500
- h) How many children love to play guitar and flute? 3500

4) Cricket	
Carrom	
chess	
Badminton	
Basket ball	

Each  represents 50 students.

- a) How many students love to play a game? 800
- b) How many students love to play chess? 50
- c) Which game is the most popular among children? ~~XXXXXXXXXX~~ Cricket
- d) Which game is the least popular among children? Chess
- e) How many students play carrom and chess? 150

f) How many students love to play badminton?

200

g) How many students love to play basketball and badminton?

350

h) How many children play cricket? 300