

Bar Graph

EX: - 17(B)

1] a) Ans: - 2015

b) Ans: - 300

c) Ans: - 500

2] a) Ans: - Kapoor's and 15 L

b) Ans: - 30 L

c) Ans: - 25 L

3] a) Ans: - Wednesday

b) Ans: - 30 students

c) Ans: - 90 students

d) Ans: - 15 students

4] a) Ans:- Science

b) Ans:- 3 hours

c) Ans:- 4 hours

CW  
37/01/22

Maths



Ch-18

Revision

1) Complete the following patterns.

a)  $\rightarrow \uparrow \Rightarrow \uparrow\uparrow \Rightarrow \uparrow\uparrow\uparrow - \uparrow\uparrow\uparrow\uparrow$

b)  $\triangle \triangle \triangle \triangle \triangle - \triangle$

c)  $\square \diamond \triangle \square \diamond \triangle \square \diamond \triangle - \square$

d)  $| \ || \ ||| \ |||| \ ||||| - ||||$

e)  $V \wedge \vee \wedge \vee \wedge - V$

f)  $A \ AB \ ABC \ ABCD \ ABCDE - ABCDEF$

g)  $AZ \ BY \ CX \ DW \ EV - FU$


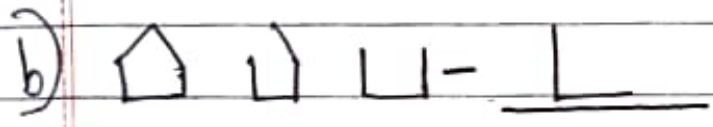
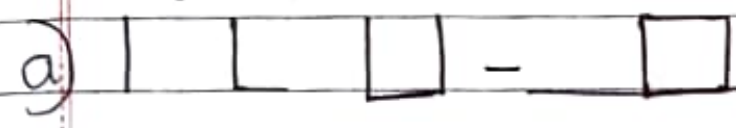
h)  $AC \ BD \ EG \ FH \ IK \ JL -$

2) Complete the following

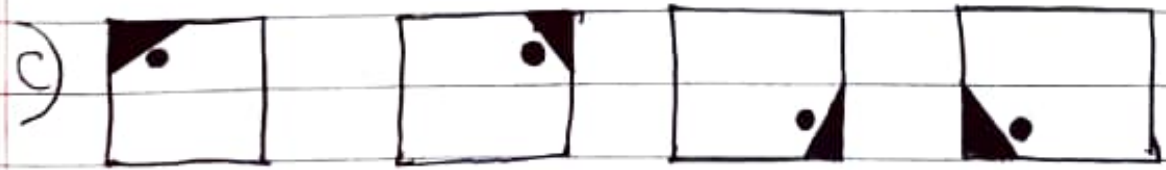
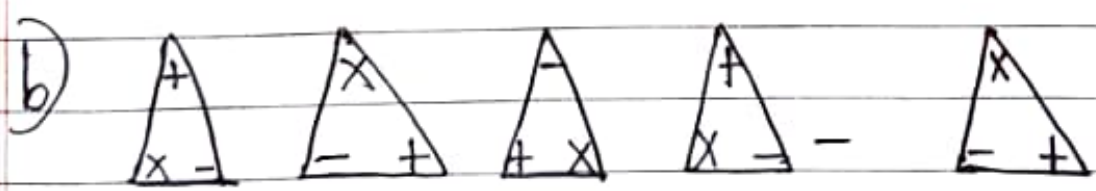
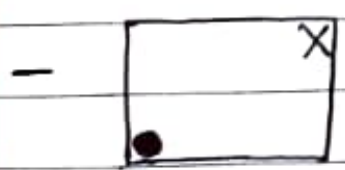
a)  $100, 90, 80, 70, 60$

b)  $160, 80, 40, 20, 10$

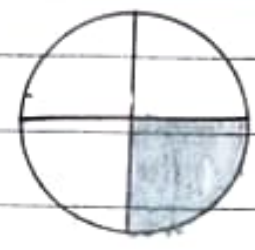
Eg:-2



EX:- 18 (A)



2)



←

