



Example 2 : Consider numbers from 53 to 57.



- (a) 54 comes after 53
- (b) 55 comes between 54 and 56.
- (c) 54, 55 and 56 come between 53 and 57.
- (d) 56 comes before 57.
- (e) 54, 55, 56 and 57 come after 53.
- (f) 53, 54, 55 and 56 are before 57.










Exercise

1. Look at the following numbers and fill in the blanks.



- (a) 15 comes before ¹⁴
- (b) 17 comes after ¹⁸
- (c) 11 comes before ¹⁰
- (d) 19 comes after ²⁰
- (e) 14 comes between ¹⁵ and ¹⁶
- (f) ¹², ¹³ and ¹⁴ come between 11 and 15.

2. What comes just before :

- | | | |
|--|--|--|
| (a)  24 | (b)  73 | (c)  11 |
| (d)  49 | (e)  10 | (f)  57 |
| (g)  60 | (h)  35 | (i)  62 |