

2. Subtract and answer.

(a) $9 - 3 = 6$

(b) $5 - 2 = 3$

(c) $5 - 4 = 1$

(d) $8 - 6 = 2$

(e) 9 minus 4 equals

(f) 7 reduced by 5 is

(g) 3 decreased from 6 equals

(h) 6 less than 8 is

(i) 5 subtracted from 9 gives

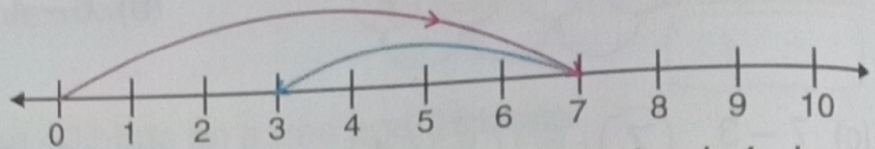
(j) The difference between 6 and 2 is

- 5
- 2
- 3
- 2
- 4
- 4

3. Subtract using number line and fill in the boxes.

(a) $7 - 4 =$

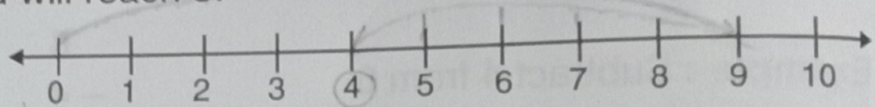
3



Method : Start from 0 and jump to 7. Jump back 4 places and you will reach 3.

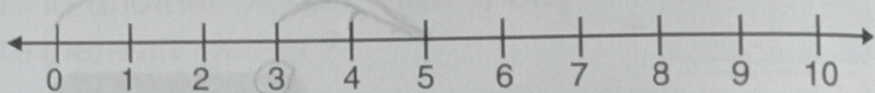
(b) $9 - 5 =$

4



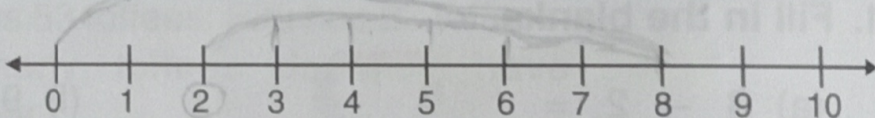
(c) $5 - 2 =$

3



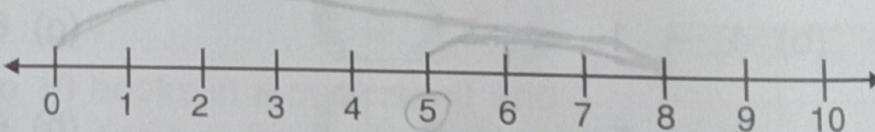
(d) $8 - 6 =$

2



(e) $8 - 3 =$

5



(f) $7 - 5 =$

2

