





Exercise


1. Fill in the blanks.


(a) $3 - 2 =$ 


(b) $4 - 1 =$ 

(c) $7 - 5 =$ 

(d) $4 - 3 =$ 

(f) $9 - 4 =$ 

(g) $8 - 7 =$ 

(h) $6 - 2 =$ 

(i) $8 - 4 =$ 