

CW  
21.1.22







Ex-17(a)

Date \_\_\_\_\_  
Page \_\_\_\_\_

1.

Pizza		
Burger		
Sandwich		
Noodles		
Pasta		

- a) Which food is most popular among the students? Burger
- b) Which is the least popular food among the students? Pasta
- c) How many children are represented in the table altogether? 25
- d) Number of children who like noodles is 6.
- e) How many children like pizza and burger? 13
- f) How many children like sandwich and Pasta? 6
- g) Number of children who like noodles and pizza is 11.

2: Mixed fruit juice	
Orange juice	
Pineapple juice	
Chocolate shake	
Strawberry shake	
Banana shake	

a) What is the weekly sale of shakes & the juice corner? 320

b) Which juice or shake is the most popular? Chocolate shake

c) What is the total sale of mixed & orange juice together? 260

d) Which juice or shake is the least popular? Strawberry shake

- e) How many glasses of banana shake are sold in a week? 100
- f) What number of glasses of strawberry shake are sold in a week? 60
- g) How many glasses of chocolate shake and pineapple juice are sold? 240
- h) What is the sale of pineapple juice? 80

3.

Guitar	♩ ♪ ♪ ♪ ♪ ♪ ♪ ♪
Piano	♩ ♪ ♪ ♪ ♪
Flute	♩ ♪
Tabla	♩ ♪ ♪
Harmonium	♩ ♪ ♪ ♪

- a) How many students are there in the Music school? 8250
- b) How many children like to play guitar? 2750
- c) What is the number of students who love to play harmonium? 1500

d) Which instrument is the most popular?  
Guitar

e) Which instrument is the least popular?  
Flute

f) How many children like to play flute and tabla? 2000

g) What is the number of children who love to play piano and harmonium? 3500

h) How many children love to play guitar and flute? ~~Guitar~~ 3500

4. Cricket	♀♀♀♀♀♀
Carrom	♀♀
Chess	♀
Badminton	♀♀♀♀
Basket Ball	♀♀♀

a) How many students love to play a game? 800

b) How many students love to play chess? 50

- c) Which game is most popular among the children? Cricket
- d) Which game is least popular among the children? Chess
- e) How many students play carrom and chess? 150
- f) How many students love to play badminton? 200
- g) How many students love to play basket ball and badminton? 350
- h) How many children play cricket? 300