


**Example 2 :** Consider numbers from 53 to 57.

- (a) 54 comes between 54 and 56.
- (b) 55 comes between 54 and 56.
- (c) 54, 55 and 56 come between 53 and 57.
- (d) 56 comes before 57.
- (e) 54, 55, 56 and 57 come after 53.
- (f) 53, 54, 55 and 56 are before 57.












**Exercise**

1. Look at the following numbers and fill in the blanks.

- (a) 11   12   13   14   15   16   17   18   19   20

- (a) 15 comes before ..... 16 .....
- (b) 17 comes after ..... 16 .....
- (c) 11 comes before ..... 12 .....
- (d) 19 comes after ..... 18 .....
- (e) 14 comes between ..... 13 ..... and ..... 15 .....
- (f) ..... 12 ....., ..... 13 ..... and ..... 14 ..... come between 11 and 15.

2. What comes just before :

- (a)  24
- (b)  73
- (c)  11
- (d)  49
- (e)  10
- (f)  57
- (g)  60
- (h)  35
- (i)  62