

Exercise - A 17 (A)

1. The table ~~at~~ below represents the favourite fast foods of children. Read carefully and answer the following questions given below.

Pizza	
Burger	
Sandwich	
Noodles	
Pasta	

- 2) Which food is most popular among the students?

Ans:- Burger

- b) Which is the least popular food among the students?

Ans:- Pasta

- c) How many children are represented in the table altogether?

Ans:- 25

CW

d) Number of children who likes noodles is

Ans:- 6

e) How many children like pizza and burger?

Ans:- 13


f) How many children like sandwich and pasta?

Ans:- 6

g) Number of children who like noodles and pizza are?

Ans:- 11

2. The following pictograph shows the weekly sale of shakes and juices at a juice corner. Read and answer the questions carefully.



[Each glass represents 20 glasses of juice and shake]

a) What is the weekly sale of shakes and the juice corner?

Ans:- ~~320~~ 320

b) Which juice or shake is the most popular?

Ans:- Chocolate shake

c) What is the total sale of mixed fruit juice and orange juice altogether?

Ans 260

CW

d) Which juice or shake is the least popular?

Ans Strawberry shake.

e) How many glasses of banana shake are sold in a week?

Ans:- 100

f) What number of glasses of strawberry are sold in a week?

Ans:- 66

g) How many glasses of chocolate shake are sold in a week? and pineapple juice are sold in a week?






Ans:-

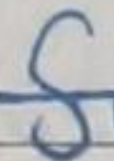

Ans:- 240

h) What is the sale of pineapple juice?

Ans:- 80

3. The pictograph below shows the musical instruments ~~with~~ which students play in a music school. Answer the following questions after observing the pictograph carefully.

Guitar	
Piano	
Flute	
Tabla	
Harmonium	

Set Scale:  = 500 children  = 250 children

- How many students are there in music school? 8250
- How many children like to play guitar? 2750
- What is the number of students who love to play harmonium? 1250
- Which instrument is the most popular? Guitar
- Which instrument is the least popular? Flute






C.W


f) How many children like to play flute and tabla? 2000

g) What is the number of children love to play piano and harmonium.

b) How many children love to play guitar and flute? 3500

4. The table below shows the games which are played in a school. Answer the following questions after observing the pictograph carefully.

Cricket	
Carrom	
Chess	
Badminton	
Basketball	

Each () represents 50 students

a) How many students love to play a game?

b) How many students love to play chess?

C.W

Date 24/1/22

Page

- c) Which game is the most popular among children? Cricket
- d) Which game is the least popular among children? Chess
- e) How many students love to play badminton, carrom and chess? 150
- f) How many students love to play badminton? 200
- g) How many students love to play basketball and badminton? ~~200~~ 350
- h) How many children play cricket? 300