
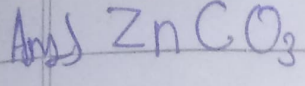


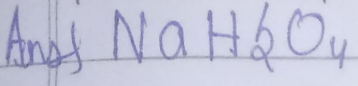
1. Write the MF of following compounds:
Calcium Acetate



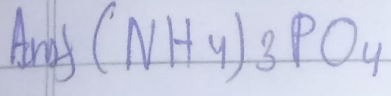
Zinc Carbonate



Sodium bisulphate



Ammonium Phosphate



2. Write The Valency And Formula Of Oxides
Of Ca, P.

