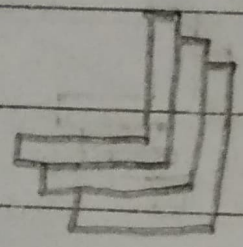


7) Name 2-D shape with no diagonals

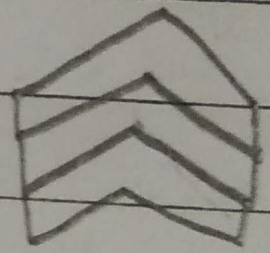
8) Name a solid with two faces Cone

H. Q

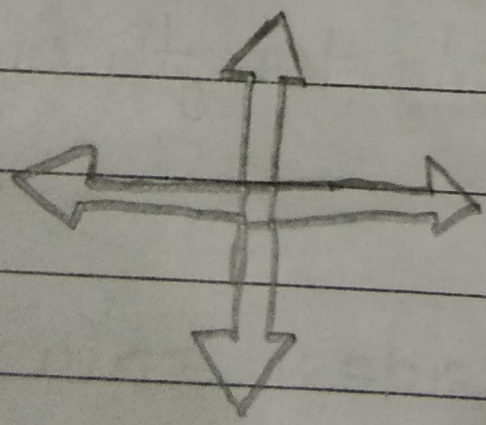
Exercise - 7 (C)



iii)



iii)



iv)

