

4. Arrange the numbers in descending order and write the greatest number of each group in the box.

(a) 99 61 21 36 85

99 85 61 36 21

99

(b) 29 35 49 52 90

90 52 49 35 29

90

(c) 37 57 47 27 97

97 57 54 37 27

97

5. Arrange the numbers in ascending order and write the smallest number of each group in the box.

(a) 89 43 24 37 78

24 37 43 78 89

24

(b) 11 90 65 57 22

11 22 57 65 90

11

(c) 32 50 75 18 24

18 24 32 50 75

18

### Fun Activity



Match the correct answers. Then decode the hidden message.

- |   |               |    |
|---|---------------|----|
| H | 2 tens 7 ones | 34 |
| O | 3 tens 4 ones | 40 |
| E | 7 tens 3 ones | 55 |
| A | 6 tens 8 ones | 27 |
| M | 1 ten 1 one   | 91 |
| T | 8 tens 0 ones | 09 |
| S | 5 tens 5 ones | 11 |
| L | 0 tens 9 ones | 68 |
| V | 4 tens 0 ones | 80 |
| I | 9 tens 1 one  | 73 |

I L O V E M A T H S  
 91 09 34 40 73 11 68 80 27 55

# Review

1. Write **True** or **False** for the following statements.







- (a) 29 is lesser than 33.
- (b) 45 comes after 46.
- (c) 98 is greater than 89.
- (d) 90 is the greatest 2-digit number.
- (e) 55 comes just before 54.
- (f) 8 comes between 9 and 10.


True.....  
 False.....  
 True.....  
 False.....  
 False.....  
 False.....

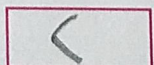
2. Fill in the blanks using suitable words/signs.


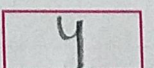
- (a) 84 comes between 83 and 85.
- (b) 31 is > 30.
- (c) 1 comes just after 0.
- (d) 98 comes just before 99.
- (e) 79 is > 69.
- (f) 10 is the without zero 2-digit number

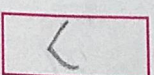


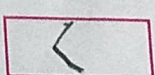
3. Fill in the blanks using appropriate symbols or numbers.

- (a) 91  90
- (b) 43  45
- (c) 27  27
- (d) 90  91
- (e) 39  40
- (f) 12  12

(g) 8 tens  79.

(h) 1 ten 9 ones  2 tens 9 ones.

(i) 54 =  tens +  ones.

(j) 20  43  59  70  92